

**Library of Congress Cataloging-Publication Data**

Floyd, Thomas L.  
Principles of electric circuits / Thomas L. Floyd.—5th ed.  
p. cm.  
Includes index.  
ISBN 0-13-232224-2  
1. Electric circuits. I. Title.  
TK454.F57 1997  
621.3815—dc20

96-13443  
CIP

Cover photo: © Superstock  
Editor: Linda Ludewig  
Developmental Editor: Carol Hinklin Robison  
Production Editor: Rex Davidson  
Text Designer: Anne Flanagan  
Cover Designer: Brian Deep  
Production Buyer: Patricia A. Tonneman  
Marketing Manager: Debbie Yarnell  
Illustrations: Jane Lopez and Steve Botts

This book was set in Times Roman by The Clarinda Company and was printed and bound by Von Hoffmann Press, Inc. The cover was printed by Von Hoffmann Press, Inc.



© 1997, 1993 by Prentice-Hall, Inc.  
Simon & Schuster/A Viacom Company  
Upper Saddle River, New Jersey 07458

All rights reserved. No part of this book may be reproduced, in any form or by any means, without permission in writing from the publisher.

Earlier editions © 1989, 1985, 1981 by Merrill Publishing Company

Printed in the United States of America

10 9 8 7 6 5 4 3 2 1

ISBN 0-13-232224-2

Prentice-Hall International (UK) Limited, *London*  
Prentice-Hall of Australia Pty. Limited, *Sydney*  
Prentice-Hall Canada Inc., *Toronto*  
Prentice-Hall Hispanoamericana, S. A., *Mexico*  
Prentice-Hall of India Private Limited, *New Delhi*  
Prentice-Hall of Japan, Inc., *Tokyo*  
Simon & Schuster Asia Pte. Ltd., *Singapore*  
Editora Prentice-Hall do Brasil, Ltda., *Rio de Janeiro*

Now that you know  $V_4$ , use Ohm's law to calculate  $R_4$  as follows:

$$R_4 = \frac{V_4}{I} = \frac{68.6 \text{ V}}{200 \text{ mA}} = 343 \Omega$$

This is most likely a 330  $\Omega$  resistor because 343  $\Omega$  is within a standard tolerance range (+5%) of 330  $\Omega$ .

**Related Exercise** Determine  $R_4$  in Figure 5-36 for  $V_S = 150 \text{ V}$  and  $I = 200 \text{ mA}$ .

## SECTION 5-6 REVIEW

1. State Kirchhoff's voltage law in two ways.
2. A 50 V source is connected to a series resistive circuit. What is the total of the voltage drops in this circuit?
3. Two equal-value resistors are connected in series across a 10 V battery. What is the voltage drop across each resistor?
4. In a series circuit with a 25 V source, there are three resistors. One voltage drop is 5 V, and the other is 10 V. What is the value of the third voltage drop?
5. The individual voltage drops in a series string are as follows: 1 V, 3 V, 5 V, 8 V, and 7 V. What is the total voltage applied across the series string?

## 5-7 ■ VOLTAGE DIVIDERS

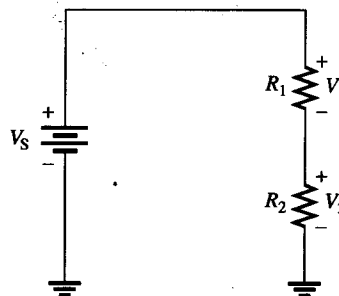
*A series circuit acts as a voltage divider. You will learn what this term means and why voltage dividers are an important application of series circuits.*

*After completing this section, you should be able to*

- Use a series circuit as a voltage divider
  - Apply the voltage-divider formula
  - Use the potentiometer as an adjustable voltage divider
  - Describe some voltage-divider applications.

To illustrate how a series string of resistors acts as a voltage divider, we will examine Figure 5-37 where there are two resistors in series. There are two voltage drops: one across  $R_1$  and one across  $R_2$ . These voltage drops are  $V_1$  and  $V_2$ , respectively, as indicated in the diagram.

**FIGURE 5-37**  
*Two-resistor voltage divider.*



Since each resistor has the same current, the voltage drops are proportional to the

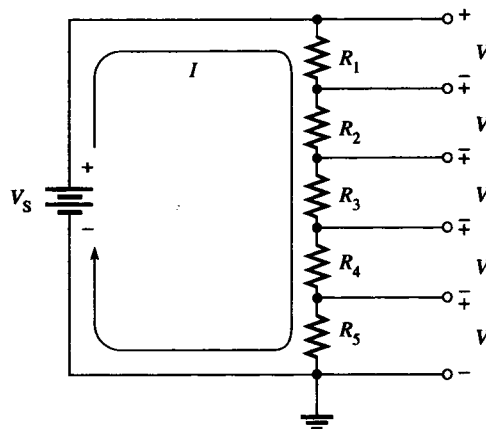
is twice that of  $V_1$ . In other words, *the total voltage drop divides among the series resistors in amounts directly proportional to the resistance values.*

For example, in Figure 5–37, if  $V_S$  is 10 V,  $R_1$  is 50  $\Omega$ , and  $R_2$  is 100  $\Omega$ , then  $V_1$  is one-third the total voltage, or 3.33 V, because  $R_1$  is one-third the total resistance (150  $\Omega$ ). Likewise,  $V_2$  is two-thirds  $V_S$ , or 6.67 V.

### Voltage-Divider Formula

With a few steps, a formula for determining how the voltages divide among series resistors can be developed. Let's assume that we have several resistors in series as shown in Figure 5–38. This figure shows five resistors as an example, but there can be any number.

**FIGURE 5–38**  
*Five-resistor voltage divider.*



Let's call the voltage drop across any one of the resistors  $V_x$ , where  $x$  represents the number of a particular resistor (1, 2, 3, and so on). By Ohm's law, the voltage drop across any of the resistors in Figure 5–38 can be written as follows:

$$V_x = IR_x$$

where  $x = 1, 2, 3, 4,$  or  $5$ .

The current is equal to the source voltage divided by the total resistance ( $I = V_S/R_T$ ). For the example circuit of Figure 5–38, the total resistance is  $R_1 + R_2 + R_3 + R_4 + R_5$ . Substituting  $V_S/R_T$  for  $I$  in the expression for  $V_x$  results in

$$V_x = \left( \frac{V_S}{R_T} \right) R_x$$

Rearranging the terms yields

$$V_x = \left( \frac{R_x}{R_T} \right) V_S \quad (5-5)$$

Equation (5–5) is the general voltage-divider formula. It can be stated as follows:

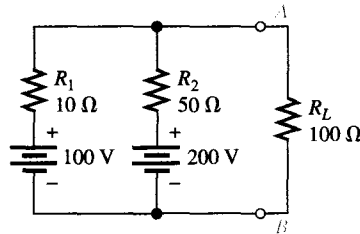
**The voltage drop across any resistor or combination of resistors in a series circuit is equal to the ratio of that resistance value to the total resistance, multiplied by the source voltage.**

The following three examples illustrate use of the voltage-divider formula.

SECTION 8-7  
REVIEW

1. To what type of circuit does Millman's theorem apply?
2. Write the Millman theorem formula for  $R_{EQ}$ .
3. Write the Millman theorem formula for  $V_{EQ}$ .
4. Find the load current ( $I_L$ ) and the load voltage ( $V_L$ ) in Figure 8-54.

FIGURE 8-54



## 8-8 ■ MAXIMUM POWER TRANSFER THEOREM

*The maximum power transfer theorem is important when you need to know the value of the load at which the most power is delivered from the source.*

*After completing this section, you should be able to*

- Apply the maximum power transfer theorem
  - State the theorem
  - Determine the value of load resistance for which maximum power is transferred from a given circuit

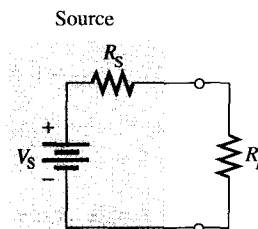
The **maximum power transfer** theorem states as follows:

**When a source is connected to a load, maximum power is delivered to the load when the load resistance is equal to the internal source resistance.**

The source resistance,  $R_S$ , of a circuit is the equivalent resistance as viewed from the output terminals using Thevenin's theorem. An equivalent circuit with its output resistance and load is shown in Figure 8-55. When  $R_L = R_S$ , the maximum power possible is transferred from the voltage source to  $R_L$ .

FIGURE 8-55

*Maximum power is transferred to the load when  $R_L = R_S$ .*



Practical applications of this theorem include audio systems such as stereo, radio, and public address. In these systems the resistance of the speaker is the load. The circuit that drives the speaker is a power amplifier. The systems are typically optimized for maximum power to the speakers. Thus, the resistance of the speaker must equal the internal source resistance of the amplifier.

Example 8-16 shows that maximum power occurs when  $R_L = R_S$ .

# Explore Litigation Insights

Docket Alarm provides insights to develop a more informed litigation strategy and the peace of mind of knowing you're on top of things.

## Real-Time Litigation Alerts



Keep your litigation team up-to-date with **real-time alerts** and advanced team management tools built for the enterprise, all while greatly reducing PACER spend.

Our comprehensive service means we can handle Federal, State, and Administrative courts across the country.

## Advanced Docket Research



With over 230 million records, Docket Alarm's cloud-native docket research platform finds what other services can't. Coverage includes Federal, State, plus PTAB, TTAB, ITC and NLRB decisions, all in one place.

Identify arguments that have been successful in the past with full text, pinpoint searching. Link to case law cited within any court document via Fastcase.

## Analytics At Your Fingertips



Learn what happened the last time a particular judge, opposing counsel or company faced cases similar to yours.

Advanced out-of-the-box PTAB and TTAB analytics are always at your fingertips.

## API

Docket Alarm offers a powerful API (application programming interface) to developers that want to integrate case filings into their apps.

## LAW FIRMS

Build custom dashboards for your attorneys and clients with live data direct from the court.

Automate many repetitive legal tasks like conflict checks, document management, and marketing.

## FINANCIAL INSTITUTIONS

Litigation and bankruptcy checks for companies and debtors.

## E-DISCOVERY AND LEGAL VENDORS

Sync your system to PACER to automate legal marketing.